
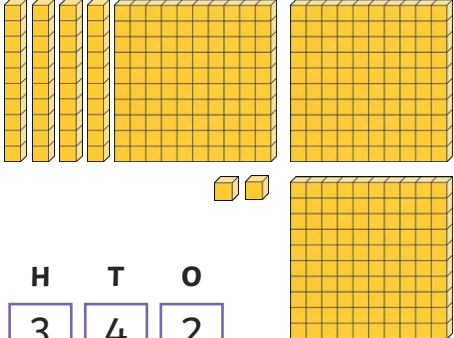
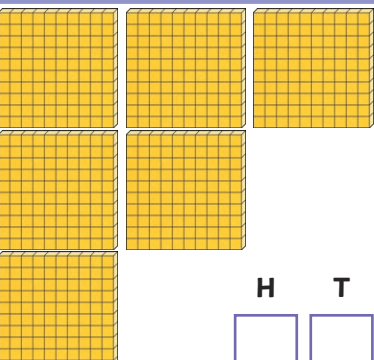
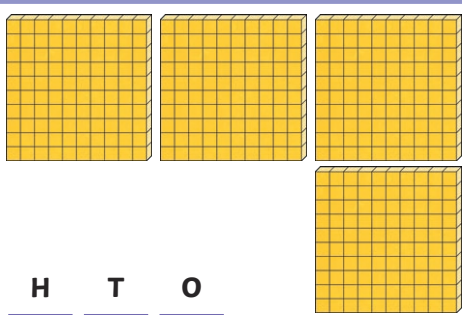
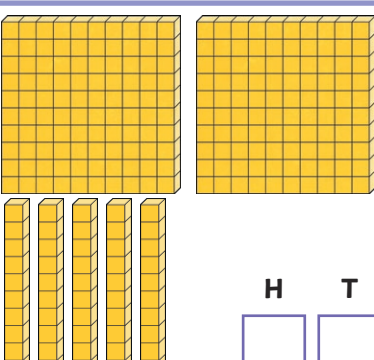
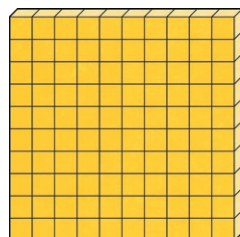
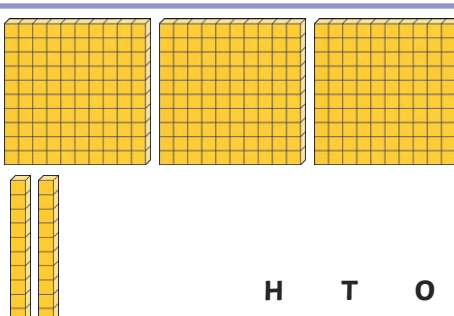
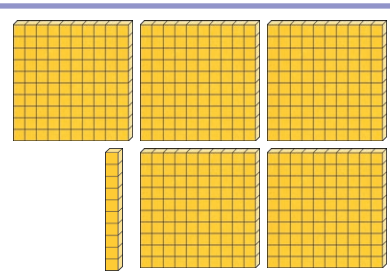
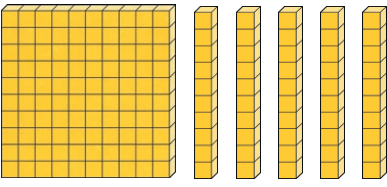

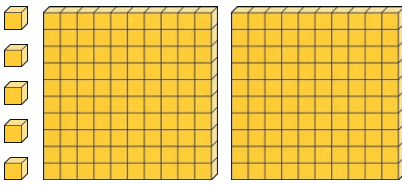

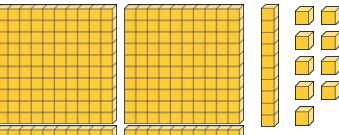

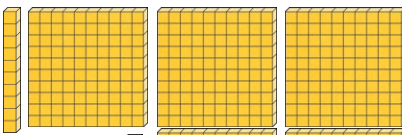

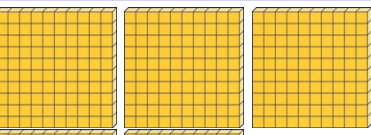

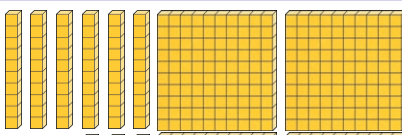
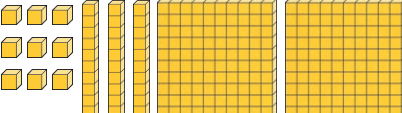
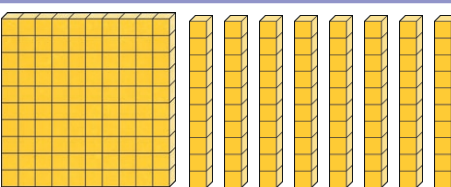

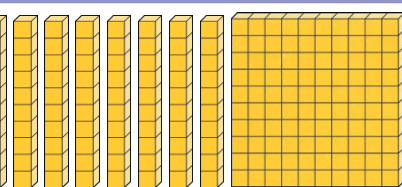



Comparing Numbers up to 1000

Compare these numbers. Write the number shown by the pictures, then circle the correct sign.

The first one is an example.

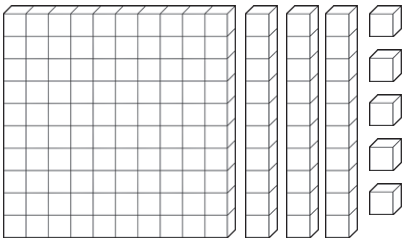


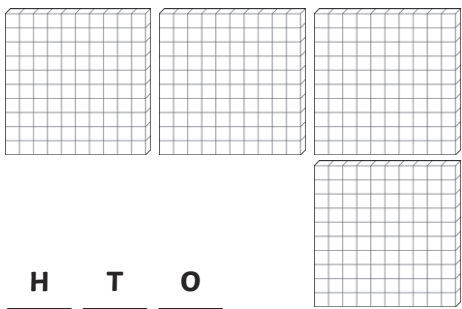
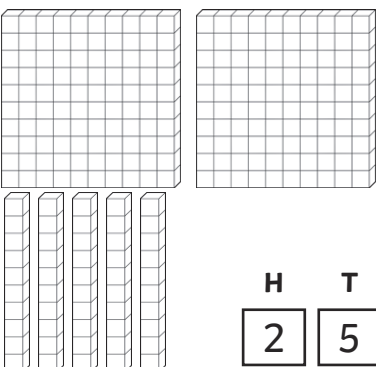
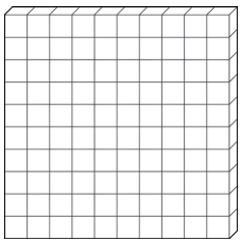
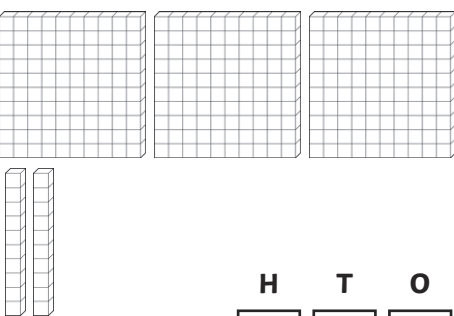

 <div style="display: flex; justify-content: space-around; margin-top: 10px;"> HTO </div> <div style="display: flex; justify-content: space-around; margin-top: 5px;"> <div style="border: 1px solid black; padding: 2px 10px;">1</div> <div style="border: 1px solid black; padding: 2px 10px;">3</div> <div style="border: 1px solid black; padding: 2px 10px;">5</div> </div>	<div style="display: flex; justify-content: space-around; font-size: 1.2em;"> more than <div style="border: 2px solid pink; border-radius: 50%; padding: 10px; display: inline-block;">less than</div> equal to </div>	 <div style="display: flex; justify-content: space-around; margin-top: 10px;"> HTO </div> <div style="display: flex; justify-content: space-around; margin-top: 5px;"> <div style="border: 1px solid black; padding: 2px 10px;">3</div> <div style="border: 1px solid black; padding: 2px 10px;">4</div> <div style="border: 1px solid black; padding: 2px 10px;">2</div> </div>
 <div style="display: flex; justify-content: space-around; margin-top: 10px;"> HTO </div> <div style="display: flex; justify-content: space-around; margin-top: 5px;"> <div style="border: 1px solid black; padding: 2px 10px;"></div> <div style="border: 1px solid black; padding: 2px 10px;"></div> <div style="border: 1px solid black; padding: 2px 10px;"></div> </div>	<div style="display: flex; justify-content: space-around; font-size: 1.2em;"> more than less than equal to </div>	 <div style="display: flex; justify-content: space-around; margin-top: 10px;"> HTO </div> <div style="display: flex; justify-content: space-around; margin-top: 5px;"> <div style="border: 1px solid black; padding: 2px 10px;"></div> <div style="border: 1px solid black; padding: 2px 10px;"></div> <div style="border: 1px solid black; padding: 2px 10px;"></div> </div>
 <div style="display: flex; justify-content: space-around; margin-top: 10px;"> HTO </div> <div style="display: flex; justify-content: space-around; margin-top: 5px;"> <div style="border: 1px solid black; padding: 2px 10px;"></div> <div style="border: 1px solid black; padding: 2px 10px;"></div> <div style="border: 1px solid black; padding: 2px 10px;"></div> </div>	<div style="display: flex; justify-content: space-around; font-size: 1.2em;"> more than less than equal to </div>	 <div style="display: flex; justify-content: space-around; margin-top: 10px;"> HTO </div> <div style="display: flex; justify-content: space-around; margin-top: 5px;"> <div style="border: 1px solid black; padding: 2px 10px;"></div> <div style="border: 1px solid black; padding: 2px 10px;"></div> <div style="border: 1px solid black; padding: 2px 10px;"></div> </div>
 <div style="display: flex; justify-content: space-around; margin-top: 10px;"> HTO </div> <div style="display: flex; justify-content: space-around; margin-top: 5px;"> <div style="border: 1px solid black; padding: 2px 10px;"></div> <div style="border: 1px solid black; padding: 2px 10px;"></div> <div style="border: 1px solid black; padding: 2px 10px;"></div> </div>	<div style="display: flex; justify-content: space-around; font-size: 1.2em;"> more than less than equal to </div>	 <div style="display: flex; justify-content: space-around; margin-top: 10px;"> HTO </div> <div style="display: flex; justify-content: space-around; margin-top: 5px;"> <div style="border: 1px solid black; padding: 2px 10px;"></div> <div style="border: 1px solid black; padding: 2px 10px;"></div> <div style="border: 1px solid black; padding: 2px 10px;"></div> </div>

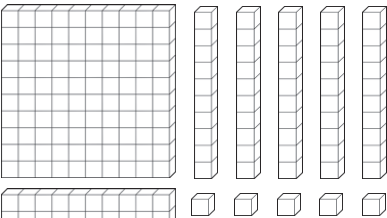
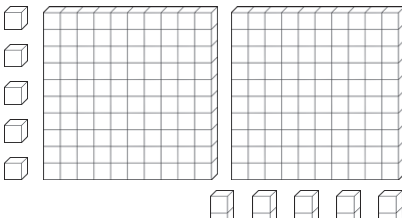



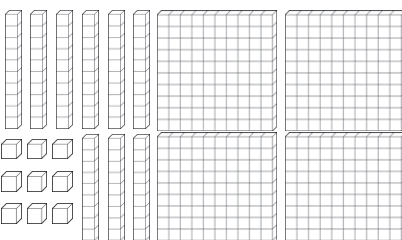

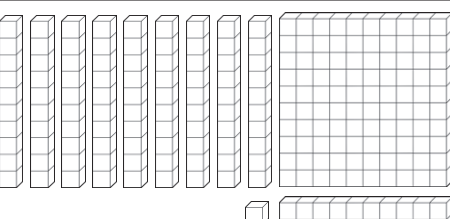
  <div style="display: flex; justify-content: space-around;"> H T O </div> <div style="display: flex; justify-content: space-around;"> <input type="text"/> <input type="text"/> <input type="text"/> </div>	<div style="display: flex; justify-content: space-around;"> more less equal </div> <div style="display: flex; justify-content: space-around;"> than than to </div>	  <div style="display: flex; justify-content: space-around;"> H T O </div> <div style="display: flex; justify-content: space-around;"> <input type="text"/> <input type="text"/> <input type="text"/> </div>
  <div style="display: flex; justify-content: space-around;"> H T O </div> <div style="display: flex; justify-content: space-around;"> <input type="text"/> <input type="text"/> <input type="text"/> </div>	<div style="display: flex; justify-content: space-around;"> more less equal </div> <div style="display: flex; justify-content: space-around;"> than than to </div>	  <div style="display: flex; justify-content: space-around;"> H T O </div> <div style="display: flex; justify-content: space-around;"> <input type="text"/> <input type="text"/> <input type="text"/> </div>
  <div style="display: flex; justify-content: space-around;"> H T O </div> <div style="display: flex; justify-content: space-around;"> <input type="text"/> <input type="text"/> <input type="text"/> </div>	<div style="display: flex; justify-content: space-around;"> more less equal </div> <div style="display: flex; justify-content: space-around;"> than than to </div>	  <div style="display: flex; justify-content: space-around;"> H T O </div> <div style="display: flex; justify-content: space-around;"> <input type="text"/> <input type="text"/> <input type="text"/> </div>
  <div style="display: flex; justify-content: space-around;"> H T O </div> <div style="display: flex; justify-content: space-around;"> <input type="text"/> <input type="text"/> <input type="text"/> </div>	<div style="display: flex; justify-content: space-around;"> more less equal </div> <div style="display: flex; justify-content: space-around;"> than than to </div>	  <div style="display: flex; justify-content: space-around;"> H T O </div> <div style="display: flex; justify-content: space-around;"> <input type="text"/> <input type="text"/> <input type="text"/> </div>

Answers

Compare these numbers. Write the number shown by the pictures, then circle the correct sign.

The first one is an example.

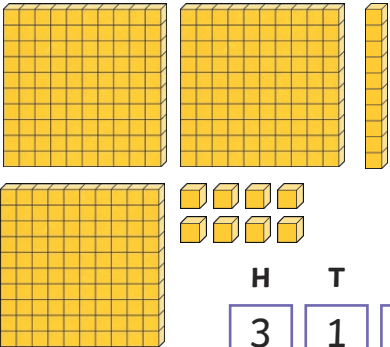
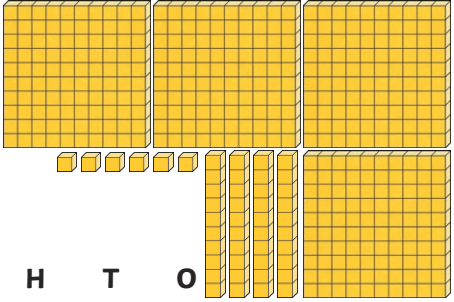
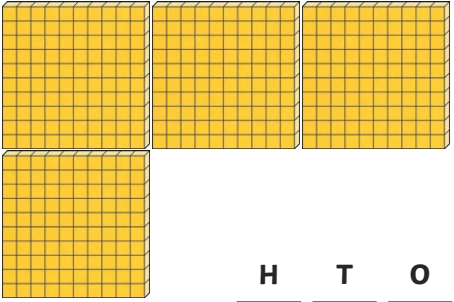

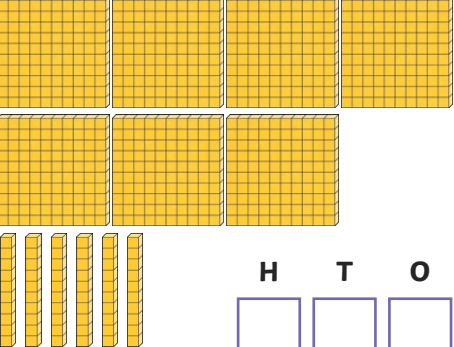

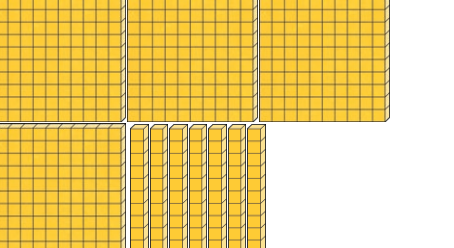
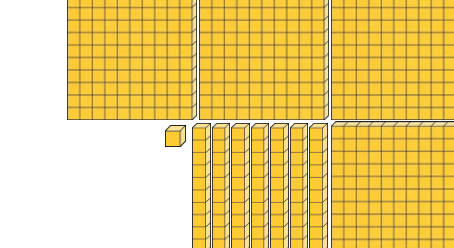
 <div style="display: flex; justify-content: space-around; margin-top: 10px;"> HTO </div> <div style="display: flex; justify-content: space-around; margin-top: 5px;"> <div style="border: 1px solid black; padding: 2px 10px;">1</div> <div style="border: 1px solid black; padding: 2px 10px;">3</div> <div style="border: 1px solid black; padding: 2px 10px;">5</div> </div>	<p>more than less than equal to</p>	 <div style="display: flex; justify-content: space-around; margin-top: 10px;"> HTO </div> <div style="display: flex; justify-content: space-around; margin-top: 5px;"> <div style="border: 1px solid black; padding: 2px 10px;">3</div> <div style="border: 1px solid black; padding: 2px 10px;">4</div> <div style="border: 1px solid black; padding: 2px 10px;">2</div> </div>
 <div style="display: flex; justify-content: space-around; margin-top: 10px;"> HTO </div> <div style="display: flex; justify-content: space-around; margin-top: 5px;"> <div style="border: 1px solid black; padding: 2px 10px;">6</div> <div style="border: 1px solid black; padding: 2px 10px;">0</div> <div style="border: 1px solid black; padding: 2px 10px;">0</div> </div>	<p>more than less than equal to</p>	 <div style="display: flex; justify-content: space-around; margin-top: 10px;"> HTO </div> <div style="display: flex; justify-content: space-around; margin-top: 5px;"> <div style="border: 1px solid black; padding: 2px 10px;">4</div> <div style="border: 1px solid black; padding: 2px 10px;">0</div> <div style="border: 1px solid black; padding: 2px 10px;">0</div> </div>
 <div style="display: flex; justify-content: space-around; margin-top: 10px;"> HTO </div> <div style="display: flex; justify-content: space-around; margin-top: 5px;"> <div style="border: 1px solid black; padding: 2px 10px;">2</div> <div style="border: 1px solid black; padding: 2px 10px;">5</div> <div style="border: 1px solid black; padding: 2px 10px;">0</div> </div>	<p>more than less than equal to</p>	 <div style="display: flex; justify-content: space-around; margin-top: 10px;"> HTO </div> <div style="display: flex; justify-content: space-around; margin-top: 5px;"> <div style="border: 1px solid black; padding: 2px 10px;">1</div> <div style="border: 1px solid black; padding: 2px 10px;">0</div> <div style="border: 1px solid black; padding: 2px 10px;">0</div> </div>
 <div style="display: flex; justify-content: space-around; margin-top: 10px;"> HTO </div> <div style="display: flex; justify-content: space-around; margin-top: 5px;"> <div style="border: 1px solid black; padding: 2px 10px;">3</div> <div style="border: 1px solid black; padding: 2px 10px;">2</div> <div style="border: 1px solid black; padding: 2px 10px;">0</div> </div>	<p>more than less than equal to</p>	 <div style="display: flex; justify-content: space-around; margin-top: 10px;"> HTO </div> <div style="display: flex; justify-content: space-around; margin-top: 5px;"> <div style="border: 1px solid black; padding: 2px 10px;">5</div> <div style="border: 1px solid black; padding: 2px 10px;">1</div> <div style="border: 1px solid black; padding: 2px 10px;">0</div> </div>

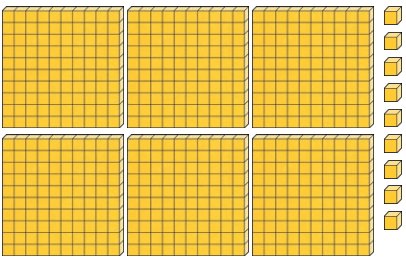
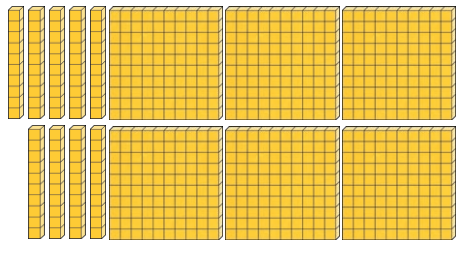


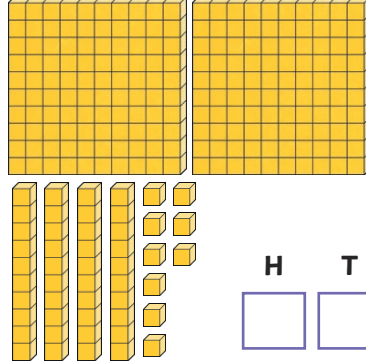
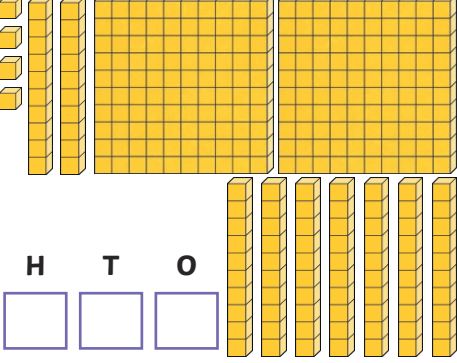
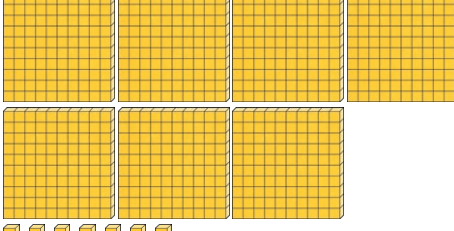

 <div data-bbox="327 369 544 465"> <table> <tr> <th>H</th> <th>T</th> <th>O</th> </tr> <tr> <td>2</td> <td>5</td> <td>5</td> </tr> </table> </div>	H	T	O	2	5	5	<div> more than less than <div>equal to</div> </div>	 <div data-bbox="1050 369 1267 465"> <table> <tr> <th>H</th> <th>T</th> <th>O</th> </tr> <tr> <td>2</td> <td>5</td> <td>5</td> </tr> </table> </div>	H	T	O	2	5	5
H	T	O												
2	5	5												
H	T	O												
2	5	5												
 <div data-bbox="327 750 544 846"> <table> <tr> <th>H</th> <th>T</th> <th>O</th> </tr> <tr> <td>5</td> <td>1</td> <td>9</td> </tr> </table> </div>	H	T	O	5	1	9	<div> more than <div>less than</div> equal to </div>	 <div data-bbox="1050 750 1267 846"> <table> <tr> <th>H</th> <th>T</th> <th>O</th> </tr> <tr> <td>6</td> <td>2</td> <td>3</td> </tr> </table> </div>	H	T	O	6	2	3
H	T	O												
5	1	9												
H	T	O												
6	2	3												
 <div data-bbox="327 1131 544 1227"> <table> <tr> <th>H</th> <th>T</th> <th>O</th> </tr> <tr> <td>6</td> <td>0</td> <td>5</td> </tr> </table> </div>	H	T	O	6	0	5	<div> <div>more than</div> less than equal to </div>	 <div data-bbox="1050 1131 1267 1227"> <table> <tr> <th>H</th> <th>T</th> <th>O</th> </tr> <tr> <td>5</td> <td>9</td> <td>9</td> </tr> </table> </div>	H	T	O	5	9	9
H	T	O												
6	0	5												
H	T	O												
5	9	9												
 <div data-bbox="327 1512 544 1608"> <table> <tr> <th>H</th> <th>T</th> <th>O</th> </tr> <tr> <td>2</td> <td>8</td> <td>1</td> </tr> </table> </div>	H	T	O	2	8	1	<div> more than <div>less than</div> equal to </div>	 <div data-bbox="1050 1512 1267 1608"> <table> <tr> <th>H</th> <th>T</th> <th>O</th> </tr> <tr> <td>2</td> <td>9</td> <td>1</td> </tr> </table> </div>	H	T	O	2	9	1
H	T	O												
2	8	1												
H	T	O												
2	9	1												

Comparing Numbers up to 1000

Compare these numbers. Write the number shown by the pictures, then circle the correct sign.

The first one is an example.

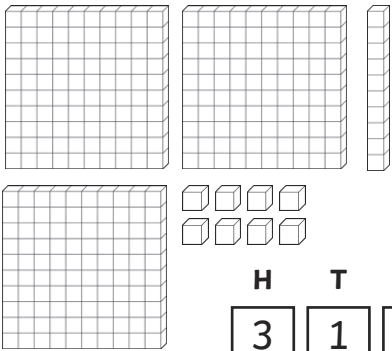
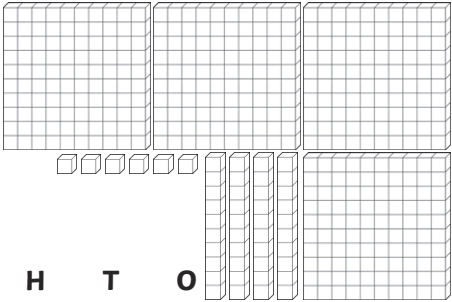
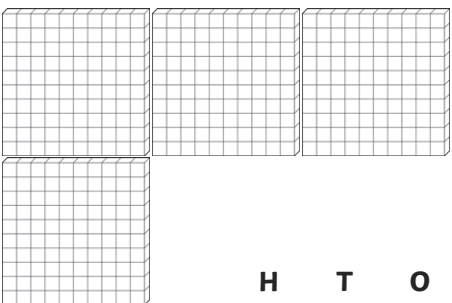

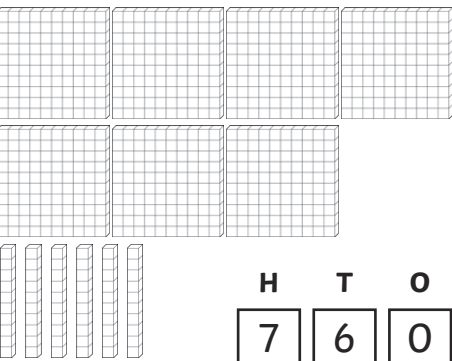

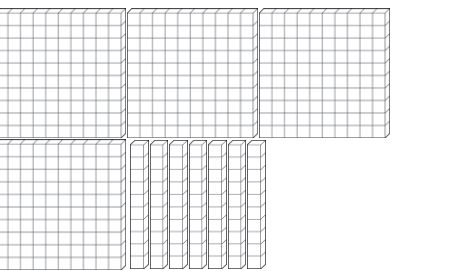
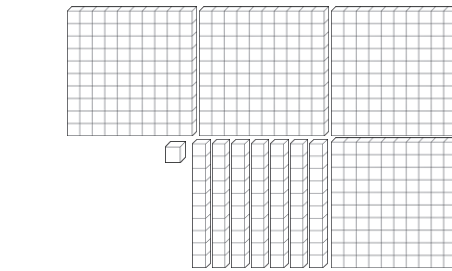
 <div style="display: flex; justify-content: space-around; margin-top: 10px;"> HTO </div> <div style="display: flex; justify-content: space-around; margin-top: 5px;"> <div style="border: 1px solid black; padding: 2px 10px;">3</div> <div style="border: 1px solid black; padding: 2px 10px;">1</div> <div style="border: 1px solid black; padding: 2px 10px;">8</div> </div>	$>$ <div style="display: inline-block; border: 2px solid pink; border-radius: 50%; padding: 10px; margin: 0 10px;"> $<$ </div> $=$	 <div style="display: flex; justify-content: space-around; margin-top: 10px;"> HTO </div> <div style="display: flex; justify-content: space-around; margin-top: 5px;"> <div style="border: 1px solid black; padding: 2px 10px;">4</div> <div style="border: 1px solid black; padding: 2px 10px;">4</div> <div style="border: 1px solid black; padding: 2px 10px;">6</div> </div>
 <div style="display: flex; justify-content: space-around; margin-top: 10px;"> HTO </div> <div style="display: flex; justify-content: space-around; margin-top: 5px;"> <div style="border: 1px solid black; padding: 2px 10px;"></div> <div style="border: 1px solid black; padding: 2px 10px;"></div> <div style="border: 1px solid black; padding: 2px 10px;"></div> </div>	$>$ <div style="display: inline-block; margin: 0 10px;"> $<$ </div> $=$	 <div style="display: flex; justify-content: space-around; margin-top: 10px;"> HTO </div> <div style="display: flex; justify-content: space-around; margin-top: 5px;"> <div style="border: 1px solid black; padding: 2px 10px;"></div> <div style="border: 1px solid black; padding: 2px 10px;"></div> <div style="border: 1px solid black; padding: 2px 10px;"></div> </div>
 <div style="display: flex; justify-content: space-around; margin-top: 10px;"> HTO </div> <div style="display: flex; justify-content: space-around; margin-top: 5px;"> <div style="border: 1px solid black; padding: 2px 10px;"></div> <div style="border: 1px solid black; padding: 2px 10px;"></div> <div style="border: 1px solid black; padding: 2px 10px;"></div> </div>	$>$ <div style="display: inline-block; margin: 0 10px;"> $<$ </div> $=$	 <div style="display: flex; justify-content: space-around; margin-top: 10px;"> HTO </div> <div style="display: flex; justify-content: space-around; margin-top: 5px;"> <div style="border: 1px solid black; padding: 2px 10px;"></div> <div style="border: 1px solid black; padding: 2px 10px;"></div> <div style="border: 1px solid black; padding: 2px 10px;"></div> </div>
 <div style="display: flex; justify-content: space-around; margin-top: 10px;"> HTO </div> <div style="display: flex; justify-content: space-around; margin-top: 5px;"> <div style="border: 1px solid black; padding: 2px 10px;"></div> <div style="border: 1px solid black; padding: 2px 10px;"></div> <div style="border: 1px solid black; padding: 2px 10px;"></div> </div>	$>$ <div style="display: inline-block; margin: 0 10px;"> $<$ </div> $=$	 <div style="display: flex; justify-content: space-around; margin-top: 10px;"> HTO </div> <div style="display: flex; justify-content: space-around; margin-top: 5px;"> <div style="border: 1px solid black; padding: 2px 10px;"></div> <div style="border: 1px solid black; padding: 2px 10px;"></div> <div style="border: 1px solid black; padding: 2px 10px;"></div> </div>



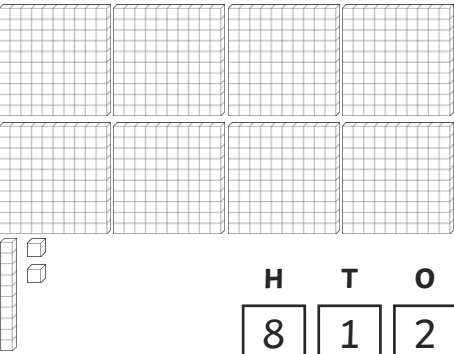

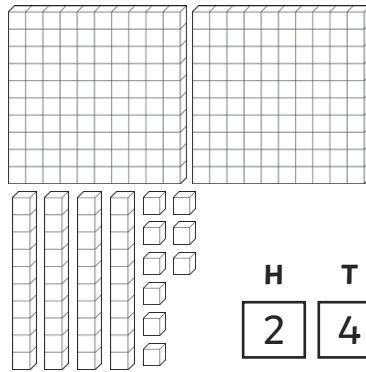
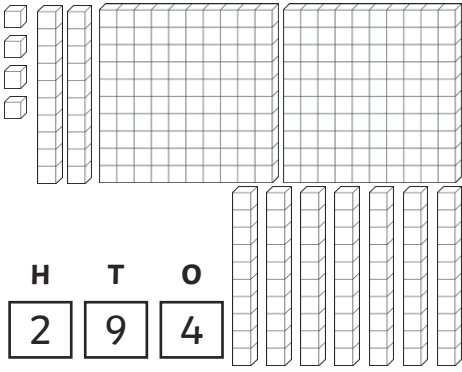
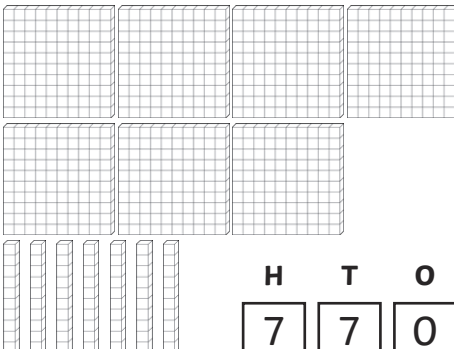
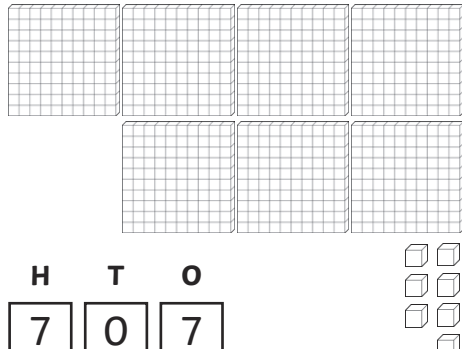
 <p>H T O</p> <p><input type="text"/> <input type="text"/> <input type="text"/></p>	<p>> < =</p>	 <p>H T O</p> <p><input type="text"/> <input type="text"/> <input type="text"/></p>
 <p>H T O</p> <p><input type="text"/> <input type="text"/> <input type="text"/></p>	<p>> < =</p>	 <p>H T O</p> <p><input type="text"/> <input type="text"/> <input type="text"/></p>
 <p>H T O</p> <p><input type="text"/> <input type="text"/> <input type="text"/></p>	<p>> < =</p>	 <p>H T O</p> <p><input type="text"/> <input type="text"/> <input type="text"/></p>
 <p>H T O</p> <p><input type="text"/> <input type="text"/> <input type="text"/></p>	<p>> < =</p>	 <p>H T O</p> <p><input type="text"/> <input type="text"/> <input type="text"/></p>

Answers

Compare these numbers. Write the number shown by the pictures, then circle the correct sign.









The first one is an example.









 <table border="1" data-bbox="327 795 545 898"> <thead> <tr> <th>H</th> <th>T</th> <th>O</th> </tr> </thead> <tbody> <tr> <td>3</td> <td>1</td> <td>8</td> </tr> </tbody> </table>	H	T	O	3	1	8	$>$ $<$ $=$	 <table border="1" data-bbox="1050 795 1268 898"> <thead> <tr> <th>H</th> <th>T</th> <th>O</th> </tr> </thead> <tbody> <tr> <td>4</td> <td>4</td> <td>6</td> </tr> </tbody> </table>	H	T	O	4	4	6
H	T	O												
3	1	8												
H	T	O												
4	4	6												
 <table border="1" data-bbox="327 1176 545 1279"> <thead> <tr> <th>H</th> <th>T</th> <th>O</th> </tr> </thead> <tbody> <tr> <td>4</td> <td>0</td> <td>0</td> </tr> </tbody> </table>	H	T	O	4	0	0	$>$ $<$ $=$	 <table border="1" data-bbox="1050 1176 1268 1279"> <thead> <tr> <th>H</th> <th>T</th> <th>O</th> </tr> </thead> <tbody> <tr> <td>8</td> <td>0</td> <td>0</td> </tr> </tbody> </table>	H	T	O	8	0	0
H	T	O												
4	0	0												
H	T	O												
8	0	0												
 <table border="1" data-bbox="327 1556 545 1659"> <thead> <tr> <th>H</th> <th>T</th> <th>O</th> </tr> </thead> <tbody> <tr> <td>7</td> <td>6</td> <td>0</td> </tr> </tbody> </table>	H	T	O	7	6	0	$>$ $<$ $=$	 <table border="1" data-bbox="1050 1556 1268 1659"> <thead> <tr> <th>H</th> <th>T</th> <th>O</th> </tr> </thead> <tbody> <tr> <td>6</td> <td>1</td> <td>0</td> </tr> </tbody> </table>	H	T	O	6	1	0
H	T	O												
7	6	0												
H	T	O												
6	1	0												
 <table border="1" data-bbox="327 1937 545 2040"> <thead> <tr> <th>H</th> <th>T</th> <th>O</th> </tr> </thead> <tbody> <tr> <td>4</td> <td>7</td> <td>0</td> </tr> </tbody> </table>	H	T	O	4	7	0	$>$ $<$ $=$	 <table border="1" data-bbox="1050 1937 1268 2040"> <thead> <tr> <th>H</th> <th>T</th> <th>O</th> </tr> </thead> <tbody> <tr> <td>4</td> <td>7</td> <td>1</td> </tr> </tbody> </table>	H	T	O	4	7	1
H	T	O												
4	7	0												
H	T	O												
4	7	1												

 <table border="1"> <thead> <tr> <th>H</th> <th>T</th> <th>O</th> </tr> </thead> <tbody> <tr> <td>6</td> <td>0</td> <td>9</td> </tr> </tbody> </table>	H	T	O	6	0	9	$>$ $<$ $=$	 <table border="1"> <thead> <tr> <th>H</th> <th>T</th> <th>O</th> </tr> </thead> <tbody> <tr> <td>6</td> <td>9</td> <td>0</td> </tr> </tbody> </table>	H	T	O	6	9	0
H	T	O												
6	0	9												
H	T	O												
6	9	0												
 <table border="1"> <thead> <tr> <th>H</th> <th>T</th> <th>O</th> </tr> </thead> <tbody> <tr> <td>8</td> <td>1</td> <td>2</td> </tr> </tbody> </table>	H	T	O	8	1	2	$>$ $<$ $=$	 <table border="1"> <thead> <tr> <th>H</th> <th>T</th> <th>O</th> </tr> </thead> <tbody> <tr> <td>8</td> <td>1</td> <td>2</td> </tr> </tbody> </table>	H	T	O	8	1	2
H	T	O												
8	1	2												
H	T	O												
8	1	2												
 <table border="1"> <thead> <tr> <th>H</th> <th>T</th> <th>O</th> </tr> </thead> <tbody> <tr> <td>2</td> <td>4</td> <td>9</td> </tr> </tbody> </table>	H	T	O	2	4	9	$>$ $<$ $=$	 <table border="1"> <thead> <tr> <th>H</th> <th>T</th> <th>O</th> </tr> </thead> <tbody> <tr> <td>2</td> <td>9</td> <td>4</td> </tr> </tbody> </table>	H	T	O	2	9	4
H	T	O												
2	4	9												
H	T	O												
2	9	4												
 <table border="1"> <thead> <tr> <th>H</th> <th>T</th> <th>O</th> </tr> </thead> <tbody> <tr> <td>7</td> <td>7</td> <td>0</td> </tr> </tbody> </table>	H	T	O	7	7	0	$>$ $<$ $=$	 <table border="1"> <thead> <tr> <th>H</th> <th>T</th> <th>O</th> </tr> </thead> <tbody> <tr> <td>7</td> <td>0</td> <td>7</td> </tr> </tbody> </table>	H	T	O	7	0	7
H	T	O												
7	7	0												
H	T	O												
7	0	7												

Comparing Numbers up to 1000













Compare these numbers in numerals and words. Circle the correct sign.








 756	> < =	 seven hundred and forty-nine
 four hundreds, two tens and three ones	> < =	 432
 787	> < =	 seven hundred and eighty-seven
 one hundred and sixty-three	> < =	 316

	$>$ $<$ $=$	
	$>$ $<$ $=$	
	$>$ $<$ $=$	
	$>$ $<$ $=$	

Answers

Compare these numbers in numerals and words. Circle the correct sign.

	$> \quad < \quad =$	
	$> \quad < \quad =$	
	$> \quad < \quad =$	
	$> \quad < \quad =$	